



CREST Cyber Olympiad (CCO)

Previous Year Paper

Class 2 (Set - A)

Time Allowed: 1 hour

Maximum Marks: 45

- There are a total of **35 questions** in this booklet comprising **2 sections** namely the **Computer & IT and Achievers' Section** consisting of **25 questions (1 mark each) & 10 questions (2 marks each)** respectively.
- There is **no negative marking**. The use of a calculator is not permitted.
- There is **only ONE correct option** to a given question.
- The use of unfair means may result in the cancellation of the exam. Any such instances must be reported at **+91-98182-94134** or **info@crestolympiads.com**

DO NOT OPEN THIS BOOKLET UNTIL ASKED TO DO SO

FILL IN THE DETAILS

Candidate Name: _____

Class: _____ Section: _____

CREST ID: _____

Computers & IT (Each Question is 1 Mark)

1. Which of the following is the other name for a laptop?

- a. Workbook
- b. Coursebook
- c. Assignment book
- d. Notebook

2. Which of the following is present on the left side of the taskbar?

- a. Small button b. Large button
- c. Mouse button d. Start button

3. Choose the correct option:
We can find this bar on top of the window, which indicates the name of the program and the name of the file.

- a. Tool Bar b. Title bar
- c. Menu Bar d. Status Bar

4. What is the name of the bar that displays the program name and the file name of the particular application?

- a. Toolbar b. Task Bar
- c. Title Bar d. Start Menu

5. When you save a file, in which part of the computer system does it get stored?



d.




6. Complete the analogy:
Convert digital data for human understanding: Output Device ::
Transfer information from paper to a computer: _____

- a. Photocopier b. Scanner
- c. Joystick d. Track Ball

7. Richard drew a bullock cart using MS Paint application. He now wants to draw a wheel. Which among the following options will he use to draw the same?

a.



b.



c.



d.



8. The teacher was teaching students about different parts of the computer system. She mentioned that the components of the computer system

communicate through a common circuit board. What is this circuit called?

- a. Video Card b. Graphics Card
- c. Motherboard d. Sound Card

9. Select the odd one out from the following options:



- a. (c) b. (a)
- c. (b) d. (d)

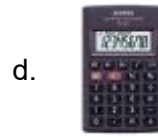
10. State which among the following statements are incorrect:

1. Keys should be pressed hard on the keyboard.
2. The mouse should be placed on a rough surface.
3. Laptops have an inbuilt keyboard.
4. A mouse is not required while reading a document.

- a. Statement 2 and statement 3
- b. Statement 1 and statement 2
- c. Statement 1 and statement 4
- d. Statement 2 and statement 4

11. Which among the following best suits the given description?

1. Compact form of a computer.
2. It is a touchscreen.
3. Wireless and Portable device.
4. Have less internal storage than laptops.



12. Sophia finished her online class and is leaving for lunch. What should she do before stepping away from the computer?

- a. Lock it b. Leave it open
- c. Restart d. Shut down

13. David pressed the power button, and his screen stayed black. What might be the problem?

- a. The screen is broken.
- b. The computer is in sleep mode.
- c. The battery might be dead.
- d. The laptop is overheating.

14. What is the main purpose of Microsoft Word?

- a. To write and edit text
- b. To play music
- c. To browse the internet
- d. To draw pictures

15. What is the default name of a new document in Microsoft Word before saving?





- a. Untitled Document
- b. New File
- c. Document1
- d. My Word File

16. If you want to make all letters bigger, what should you do?

- a. Increase Font Size
- b. Underline the text

- c. Press Backspace
- d. Click Save

17. You want to write something neatly on your drawing. Which tool will help you?

- a. 
- b. 
- c. 
- d. 





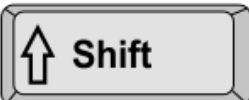

18. Which device is used to play video games on a screen?

- a. Drone
- b. Gaming Console
- c. Smartwatch
- d. Video player

19. If Num Lock is off, what happens when you press number keys on the right side of the keyboard?

- a. They type numbers
- b. They don't work
- c. They type symbols
- d. They turn into letter keys

20. Which key helps delete a full word instead of just one letter?


- a.  + 
- b.  + 
- c.  + 



21. Which type of mouse is commonly used by gamers?

- a.  **Joystick**
- b.  **Gamepad**
- c.  **Touchpad**
- d.  **Gaming mouse**

22. What does a touchpad replace on a laptop?



- a. Mouse
- b. Keyboard
- c. Monitor
- d. Camera





23. What should you do if a video does not have sound?

- a. Turn off the screen
- b. Ask an adult for help
- c. Ignore it and continue watching
- d. Restart the device

24. Which of these needs the Internet to work?

- a. A messaging app
- b. A photo saved on your computer
- c. A calculator app
- d. A drawing app





25. Which tool is used to fill a shape with colour in MS Paint?

- a.  ms word
- b.  youtube kids
- c.  ms paint
- d.  calculator

Achievers' Section (Each Question is 2 Marks)

26. Which of these is not a valid option to rotate an image in MS Paint?

- a. Rotate left 90°
- b. Rotate 270°
- c. Rotate right 90°
- d. Flip Vertical

- a. 
- b. 
- c. 
- d. 

27. Where is the data of a computer saved?

- a. Mouse b. Hard Disk
- c. Keyboard d. Monitor

28. Fill in the blanks:

The _____ key and the _____ key can be used in combination with other keys to perform shortcuts and special tasks.

- a. Control, Alt
- b. Function, toggle
- c. Delete, Insert
- d. Caps Lock, Num Lock

29. Select among the given options that best relate to the given statements:

Statement 1: Wireless technology used for Internet

Statement 2: Can be used by Laptops, Computers and Smartphones

Statement 3: Portable Technology

30. Complete the analogy:

Controlling signals to an information processing system: Input Device::
Communicating the results of processed data: _____

- a. Arithmetic and Logical Unit
- b. CPU
- c. Controllers
- d. Output Device

31. Match the following:

	Column A		Column B
1.	Cursor	a.	Special case character
2.	Page Up Key	b.	Blinking line on the monitor
3.	F12	c.	Cursor-controlled key
4.	@	d.	Function key

- a. 1 - b, 2 - c, 3 - d, 4 - a
- b. 1 - b, 2 - d, 3 - c, 4 - a
- c. 1 - b, 2 - c, 3 - a, 4 - d
- d. 1 - b, 2 - a, 3 - d, 4 - c



32. Which among the following statements is false?

1. We can use computers to learn a new skill.
2. Computers are used only for entertainment purposes.
3. Computers do not need any human interference.
4. Computers are used in hospitals to generate reports and bills for patients.

- a. Statement 1 and statement 4
- b. Statement 3 and statement 4
- c. Statement 2 and statement 3
- d. Statement 1 and statement 3

33. Sam found a new word in a book and wants to know its meaning. Which app should he use?



34. Emma used the Zoom tool but now wants to go back to her normal view. What should she do?

- a. Click the Zoom tool again.
- b. Press 'Close' on the window.
- c. Restart the computer two times.
- d. Press 'Esc' on the keyboard.

35. Olivia wants to watch a video of her favourite bedtime story before going to sleep. Which app should she open?

- a. YouTube Kids, where she can find animated story videos with voice narration.
- b. Google, where she can search for bedtime stories but won't get videos.
- c. Play Store, where she can download story apps but not watch videos instantly.
- d. YouTube Music, where she can listen to songs but not watch bedtime stories.

Answer Key

- | | | | | | | | | | |
|-------|-------|-------|-------|-------|-------|-------|-------|-------|-------|
| 1. d | 2. d | 3. b | 4. c | 5. c | 6. b | 7. c | 8. c | 9. d | 10. b |
| 11. a | 12. a | 13. b | 14. a | 15. c | 16. a | 17. b | 18. b | 19. b | 20. d |
| 21. d | 22. a | 23. b | 24. a | 25. b | 26. b | 27. b | 28. a | 29. d | 30. d |
| 31. a | 32. c | 33. a | 34. a | 35. a | | | | | |